
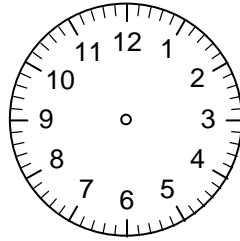


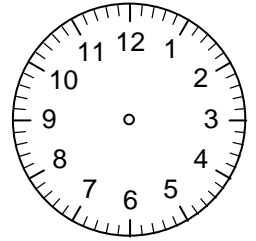
Zeichne die Zeiger ein und bestimme die neue Uhrzeiten!



2 Stunden später




15 Minuten früher



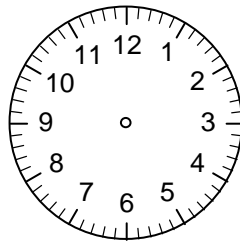
_____ Uhr

_____ Uhr

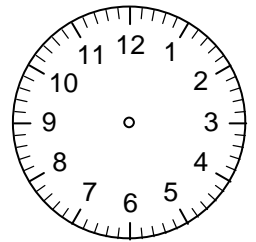
_____ Uhr



1 Stunde früher




25 Minuten später



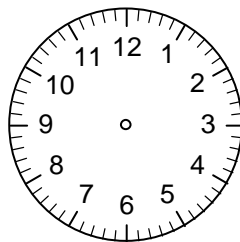
_____ Uhr

_____ Uhr

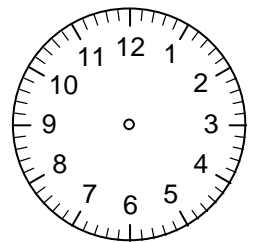
_____ Uhr



3 Stunden später




39 Minuten früher



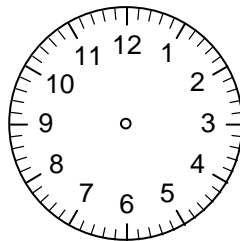
_____ Uhr

_____ Uhr

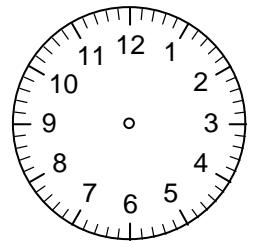
_____ Uhr



90 Minuten später




1/2 Stunde früher




_____ Uhr

_____ Uhr

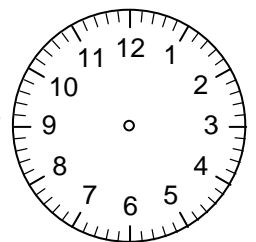
_____ Uhr



3/4 Stunde früher



60 Minuten später



_____ Uhr

_____ Uhr

_____ Uhr