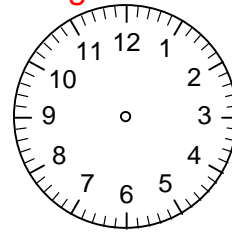



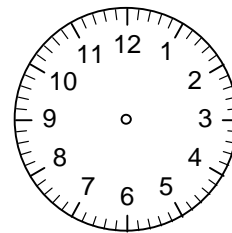

Bestimme die Uhrzeiten und zeichne die Zeiger in die Uhren ein!



\_\_\_\_\_ Uhr

2 h 15 min früher

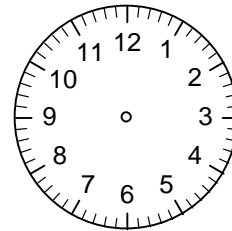

\_\_\_\_\_ Uhr



\_\_\_\_\_ Uhr

1h 30 min später

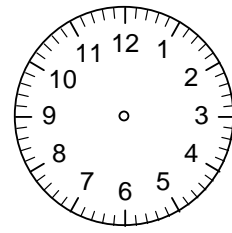

\_\_\_\_\_ Uhr



\_\_\_\_\_ Uhr

2 h 15 min früher

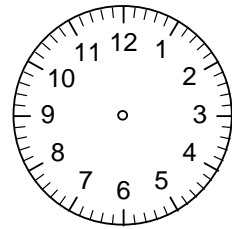

\_\_\_\_\_ Uhr



\_\_\_\_\_ Uhr

4h 45 min später

\_\_\_\_\_ Uhr



\_\_\_\_\_ Uhr

11h 25 min später

\_\_\_\_\_ Uhr