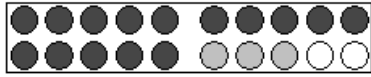
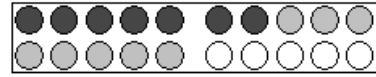


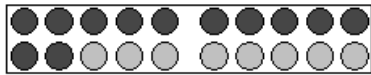
Im Zahlenraum bis 20 rechnen und die Aufgabe darstellen



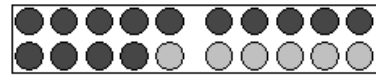
$$\underline{\quad} + \underline{\quad} = \underline{\quad}$$



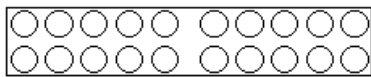
$$\underline{\quad} + \underline{\quad} = \underline{\quad}$$



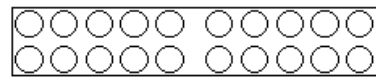
$$\underline{\quad} + \underline{\quad} = \underline{\quad}$$



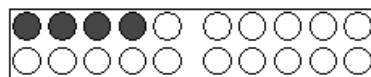
$$\underline{\quad} + \underline{\quad} = \underline{\quad}$$



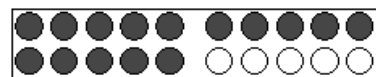
$$11 + 4 = \underline{\quad}$$



$$3 + 15 = \underline{\quad}$$



$$4 + \underline{\quad} = 19$$



$$15 + \underline{\quad} = 17$$

19	
15	
2	
13	
4	



11	
6	
1	
2	

