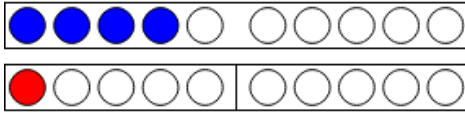
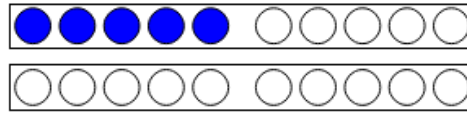


Wir üben das Verdoppeln von Mengen!

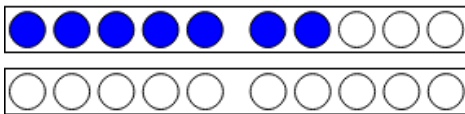
Erstelle eine passende Plusaufgabe! Male die Mengenplättchen passend an!



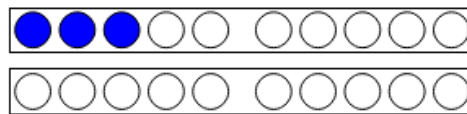
$$1 + 1 = 2$$



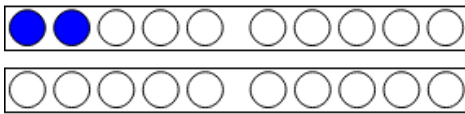
$$5 + \underline{\quad} = \underline{\quad}$$



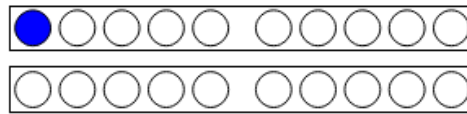
$$7 + \underline{\quad} = \underline{\quad}$$



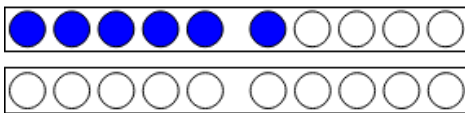
$$3 + \underline{\quad} = \underline{\quad}$$



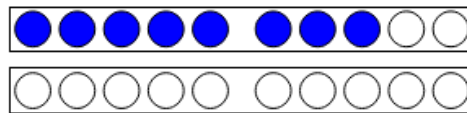
$$2 + \underline{\quad} = \underline{\quad}$$



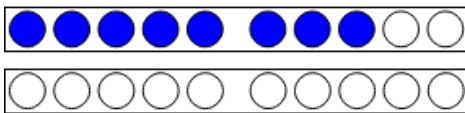
$$1 + \underline{\quad} = \underline{\quad}$$



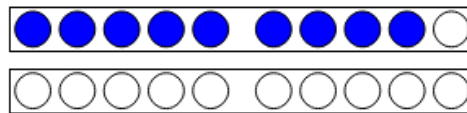
$$6 \text{ ( ) } \underline{\quad} = \underline{\quad}$$



$$\square \text{ ( ) } \square \text{ ( ) } \square$$



$$\square \text{ ( ) } \square \text{ ( ) } \square$$



$$\square \text{ ( ) } \square \text{ ( ) } \square$$

