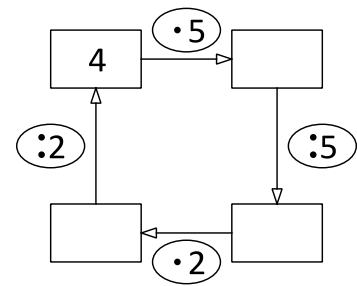
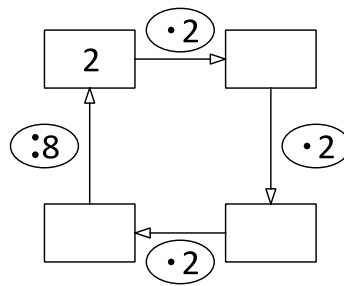
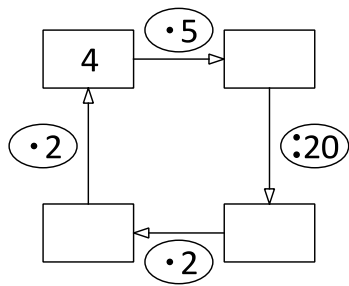




## Wir üben das 1x1 mit der 2,5,10



$5 \cdot 2 = \underline{\quad}$

$7 \cdot 10 = \underline{\quad}$

$3 \cdot 2 = \underline{\quad}$

$5 \cdot 10 = \underline{\quad}$

$6 \cdot 10 = \underline{\quad}$

$3 \cdot 10 = \underline{\quad}$

$2 \cdot 5 = \underline{\quad}$

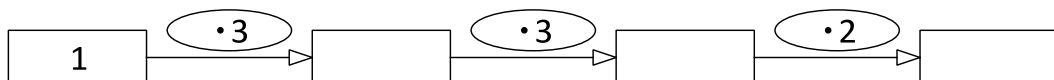
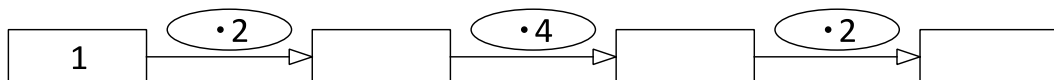
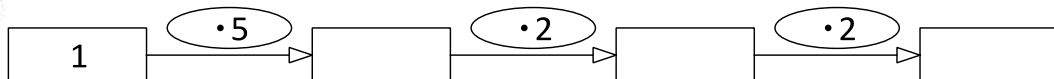
$3 \cdot 10 = \underline{\quad}$

$6 \cdot 10 = \underline{\quad}$

$10 \cdot 5 = \underline{\quad}$

$9 \cdot 10 = \underline{\quad}$

$4 \cdot 5 = \underline{\quad}$



x	2	5	
10			
2			

